

Episode 8: CARBON SINKS -- TREES

QUESTION: Carbon Sink or Carbon Source?

Activity 1: Trees

Draw images of the ways we use trees, living or dead. In your drawing, is the tree "Storing Carbon" or "Releasing Carbon" or both? You may want to watch Episode 3 about wood fires before doing this activity.

Storing Carbon	Releasing Carbon	Storing Carbon	Releasing Carbon	Storing Carbon	Releasing Carbon
Storing Carbon	Releasing Carbon	Storing Carbon	Releasing Carbon	Storing Carbon	Releasing Carbon

Share drawings with others in your class. If you want to, you can redraw any icons that you see differently after sharing.

Activity 2:

You will find out how much carbon is stored in a nearby tree, including its roots. This activity can be found at [Activity Kit \(wordpress.com\)](#) But I have also copied it into this document.

Note: In the [original research](#), cottonwood is included with aspen/willow.

You can find [the density of trees here](#).



LEARNER'S TOOLKIT

Photosynthesis: Calculating Biomass and Carbon Storage for Trees

Standards

NGSS LS1.C Organization for matter and energy flow in organisms

NGSS ESS3.D Global climate change

Grade Level: Middle School

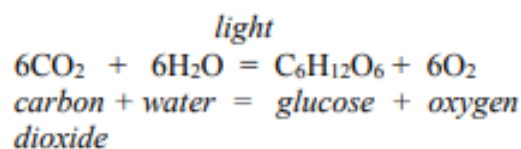
Equipment: Tape measure or forester's DBH tape
Graph of DBH v. Tree Biomass
Tree



Overview

Photosynthesis is the process that builds the biomass of plants.

Within leaves, carbon dioxide enters through pores called *stomata*, where it reacts with water to form glucose and oxygen molecules. The oxygen exits the leaf through the same *stomata*.



In this reaction light energy from the sun is converted into chemical energy stored in the glucose molecule. Once in the leaf, the glucose is transformed through additional reactions into a range of new compounds, such as the lignin ($\text{C}_{31}\text{H}_{34}\text{O}_{11}$) and cellulose ($\text{C}_6\text{H}_{10}\text{O}_5$) that form the mass of trees. While a plant needs a small amount of additional nutrients for healthy growth (N, P, K), the mass of these additions is very small and accounts for only a tiny fraction of the mass of the plant. In a tree, approximately 50% of the biomass is derived from the carbon that enters the leaves as the invisible atmospheric gas CO_2 .

Can we measure the mass of a tree and find out how much CO_2 it holds? That would be easy to do if we were to cut it down, and cut it into small enough pieces to put onto a scale. But that job itself is difficult, and it is certainly hard on the tree. If we could measure or estimate the volume of a tree we could calculate its mass. But trees have very irregular shapes, and it might at first seem difficult or impossible to calculate the biomass of such an unusually-shaped object. Fortunately, the US Forest Service (and others) have taken the trouble to cut down and weigh a lot of trees of many species, and from these data have developed relationships between the mass of trees and measurements that are easy to make. Graph 1 is a graph of the relationship between a tree's Diameter at Breast Height (DBH) and mass for ten different species of trees. In this relationship the diameter is measured in centimeters and the mass is given in kilograms.

Procedure

DBH is measured 4.5 feet above the ground. It is not critical to measure at exactly this height; it is more important to avoid bumps and branches on the trunk. DBH is not measured directly, rather, we measure the circumference of the trunk and calculate the diameter, as in Figure 1:



Figure 1: The circumference and diameter of a circle are related by the factor pi: $\pi=3.14159$. Measure the circumference of the tree (photo) in order to calculate the diameter.

Step 1: Identify the tree species

Species: _____

If you are working with a regular tape measure you will measure and record the circumference, in units of centimeters, then divide the circumference by π to find the diameter. If you have a forester's DBH tape you can read the circumference from one side, then flip the tape over to read the diameter on the back side.

Step 2: Measure the circumference and calculate diameter

Circumference (cm): _____

Diameter (cm): _____

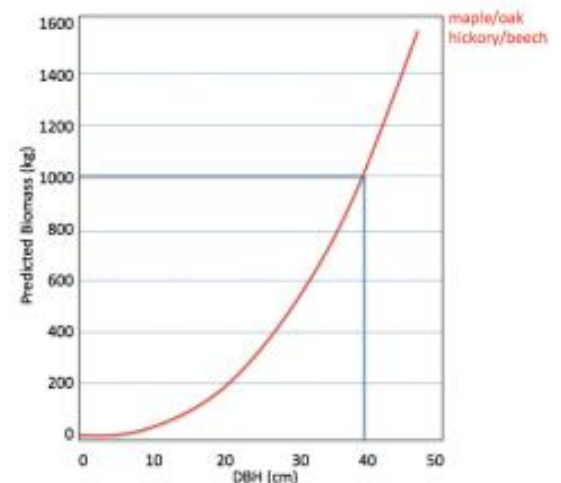
Once you have calculated the diameter, use Graph 1 to find the appropriate mass in kilograms.

Example: A Sugar Maple tree with a DBH=40cm has a mass of 1000kg (see small graph).

Step 3: Use Graph 1 to find the mass

Mass (kg): _____

One kilogram is approximately 2 pounds (1 lb = 2.2 kg). A 1000kg tree weighs 2200 pounds!



2



We also know that half of the mass of the tree is made of carbon. So we can also calculate how much atmospheric carbon the tree stores.

Step 4: Calculate the mass of carbon in the tree (carbon = mass/2)

Mass C (kg): _____

This is important because carbon dioxide is a Greenhouse Gas – a gas that absorbs long-wavelength (heat) energy – that keeps the atmosphere warm. A little CO₂ in the atmosphere keeps Earth comfortably habitable for human beings, but too much atmospheric CO₂ leads to global warming which disrupts normal Earth system processes. All of the carbon that you calculated for your tree came from the atmosphere. It was incorporated into the tree during photosynthesis. So we can show that trees are able to remove a lot of excess CO₂ from the atmosphere! And in fact, we can take the mass of carbon calculated in Step 4 and turn it into the mass of carbon dioxide that each tree stores.

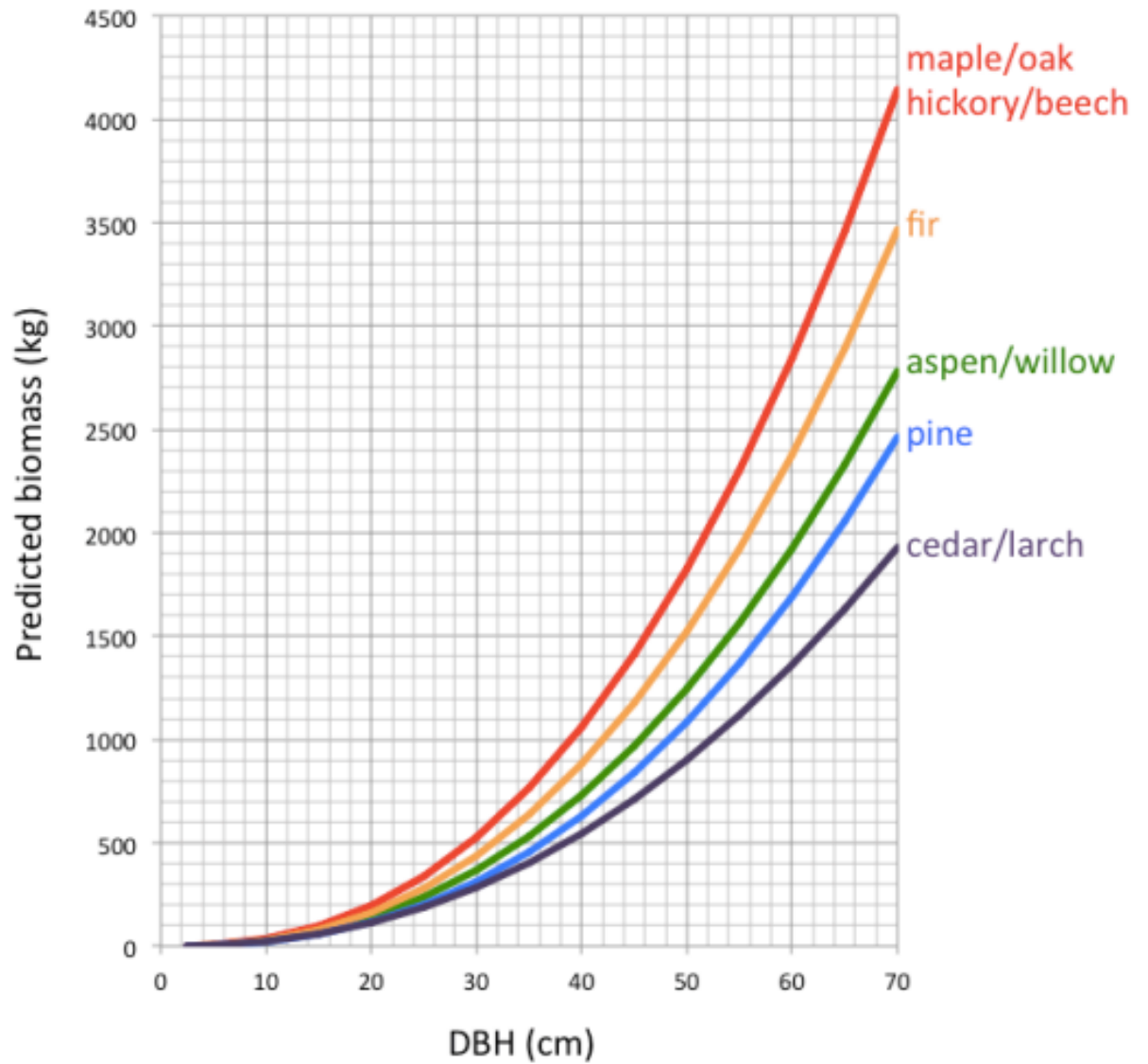
Step 5: Use the mass of carbon in the tree to find the mass of carbon dioxide the tree has removed from the atmosphere. For every carbon atom, a CO₂ molecule also contains two oxygen atoms. So the amount of CO₂ per kg of carbon in the tree is the ratio of the mass of CO₂ (atomic mass=44) to the mass of carbon (atomic mass=12).

Mass CO₂ (kg) = result from Step 4 x (44/12): _____

Finally we can think about one more important aspect of our tree – the roots! Roots contribute to the total mass of the tree and thus the total amount of CO₂ stored. The biomass charts - and the underlying equations that we use to make the charts – come from the work of foresters who are interested in the above-ground part of the tree. If we assume that there is an additional 25% of the tree belowground we can refine our calculation from Step 5 by multiplying it by 1.25.

Step 6: Find the total mass of CO₂ in both the “roots and shoots” of the tree (=CO₂ x 1.25)

Total Mass of stored CO₂ (kg): _____



Graph 1: USFS data relating tree diameter at breast height to biomass (Jenkins et al., 2003)